


Show the shaded area as a fraction,
a decimal, and a percentage


NAME _____

DATE _____

EXAMPLE:




Fraction $\frac{20}{100}$
 Decimal 0.20
 Percentage 20%



Fraction _____

Decimal _____


Percentage _____%



Fraction _____

Decimal _____


Percentage _____%



Fraction _____

Decimal _____


Percentage _____%



Fraction _____

Decimal _____


Percentage _____%



Fraction _____

Decimal _____


Percentage _____%



Fraction _____

Decimal _____


Percentage _____%



Fraction _____

Decimal _____


Percentage _____%



Fraction _____

Decimal _____

Percentage _____%



Fraction _____

Decimal _____

Percentage _____%

Percentage _____% Percentage _____% Percentage _____% Percentage _____%