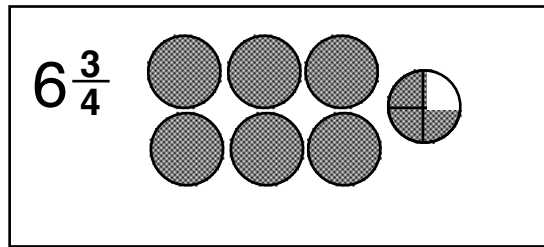
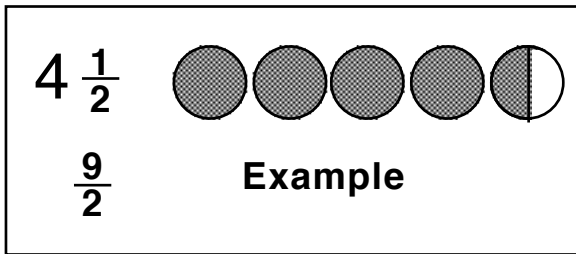


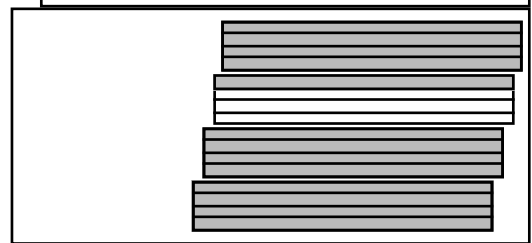
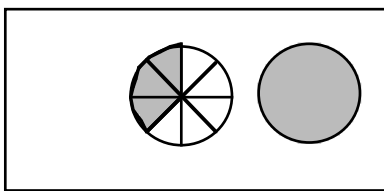
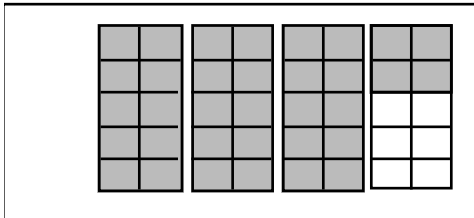
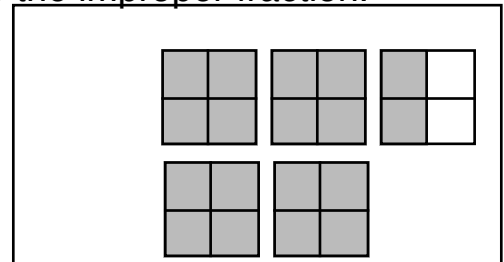
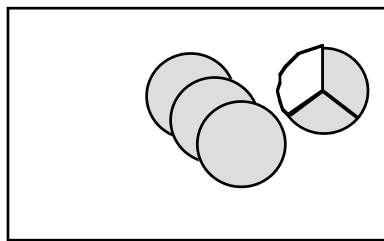
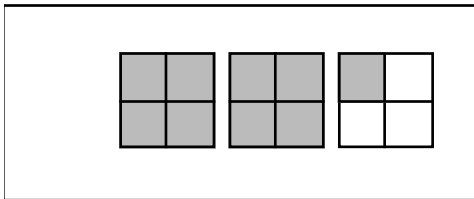
Mixed Numbers I

Name _____

A mixed number is a whole number and a fraction together. Example is below.



Write the mixed number next to the picture. Also write the improper fraction.



Given the Mixed Number, draw a picture like above, and show the improper fraction too

$6 \frac{1}{2}$	$3 \frac{1}{3}$	$8 \frac{1}{4}$
$2 \frac{2}{6}$	$7 \frac{3}{8}$	$5 \frac{3}{4}$